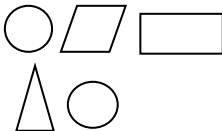


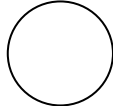






Choose math tasks for the day: Toss a coin or a counter on the mat and solve the problem where it lands!  
 You may use the back of this sheet or another paper.

## Math Choice Board

Count down to zero. 15 <u>  </u> <u>  </u> <u>  </u> <u>  </u> 10, <u>  </u> <u>  </u> <u>  </u> <u>  </u> <u>  </u> <u>  </u> 3, <u>  </u> <u>  </u> 0	Look at a calendar. How many days are in April?	Eight coconuts were on the tree. Three fell off. How many are left? _____ coconuts	Solve. $10 - 7 = \underline{\quad}$	Write <u>three equations</u> that equal 10.	Stephany has 2 dimes. Can she buy ice cream that costs 30 cents? Yes      No	Color the circles. 
Write the numbers for the stars. $** + ** = ****$ $\_ + \_ = \_$	Gregory has two cats and three fish. How many pets does Gregory have? _____ pets	Solve the addition fact family. $*** + * = \underline{\quad}$ $* + *** = \underline{\quad}$	Circle the child who is third from the arrow. 	Is this a triangle?  Yes      No	What comes next? X O X X O O _____ _____	Circle the number that tells how many <u>groups of ten</u> are in <u>53</u> . 10   5   3   53
Color <u>half</u> of the circle. 	Write the number. Sixteen _____ Eighty _____ Seven _____ One hundred one _____	Fill in the missing numbers. 27, 26, 25, _____, _____, _____, 21	Hannah has 6 nickels. How much money does she have? _____	Solve. $10 - 5 = \underline{\quad}$	How would you show 10 o'clock on a digital clock? 	Su had 9 pencils. Al gave her some more pencils. Now Su has 15 pencils. How many pencils did Al give her?
Count by twos. YY      YY      YY _____ YY      YY      YY _____	Jack caught three crickets and six beetles. How many bugs did he catch? _____ bugs	8 is greater than 18. Yes      No	Draw a picture to show $6 - 2 = 4$ .	Write <u>four equations</u> using the numbers 5, 9, and 4.	How many groups of ten are in the number 90? _____ groups	Solve. $4 + 5 = \underline{\quad}$
Mark the numbers you would say when you count by <u>twos</u> . 1 2 3 4 5 6 7 8	Circle the one that is <u>heavier</u> .  spider  man	Tell an adult what time the clock shows. 	Yesterday was what day of the week?			